

Name _____

Homework # _____

Graphing Lines

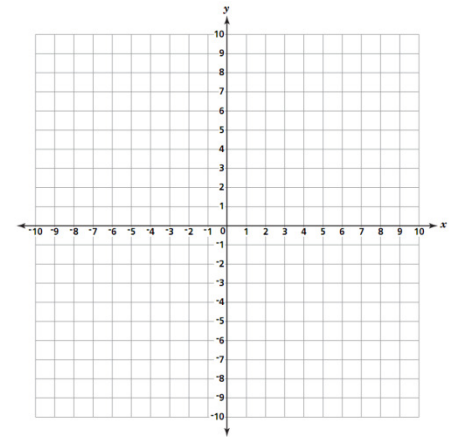
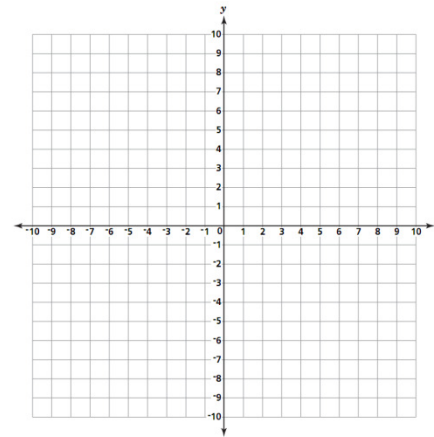
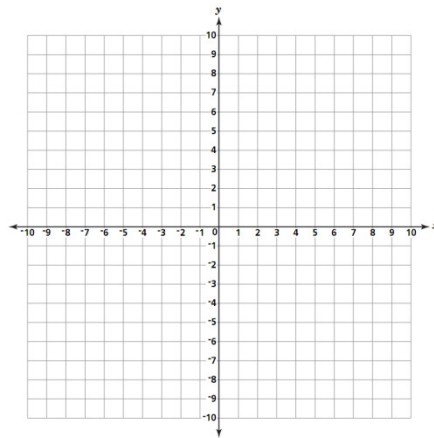
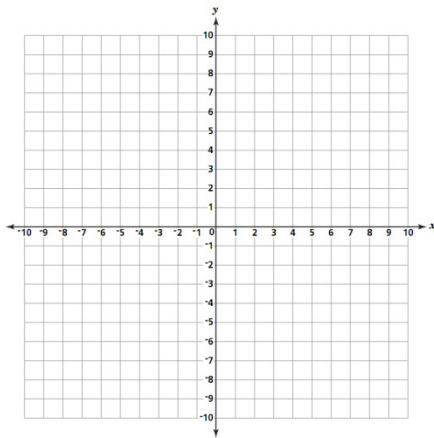
Complete the table. Graph the line on the coordinate plane below.

x	$Y = -3x$	y
-2		
-1		
0		
1		

x	$Y = -4x$	y
-1		
0		
1		
2		

x	$Y = 3x + 1$	y
0		
1		
2		
3		

x	$Y = 4x - 6$	y
-1		
0		
1		
2		



x	$Y = 5x + 3$	y
-2		
-1		
0		
1		

x	$Y = -4x - 3$	y
-2		
-1		
0		
1		

x	$y = \frac{1}{4}x - 3$	y
-8		
-4		
0		
4		

x	$y = \frac{-1}{2}x + 4$	y
-4		
-2		
0		
2		

